

Math-

___(5) Reducing Fractions Time Test– This can be frustrating at first. Don't fret! Grade the test then make a goal for 5 minutes. We will celebrate the improvements!

___(85) Test 17– complete, grade and correct- Test tomorrow

English

Grammar

___ (5) Chant Reference Chart 152 on page 466. Saying the verbs very quickly like we do in class.

___(20) Classroom Practice 47. Parents please grade, mark the number missed at the top and have students correct items missed. If your child is having a difficult time with a concept, please let me know.

Writing

___ (15) Research Skills– Look through magazines, or newspapers. Find an picture with a caption. Glue the caption on a piece of notebook paper with your heading and title. Underneath the picture, write about how the caption helps you learn more information. Your remark should be insightful.

Literature (From the Mixed-Up Files of Mrs. Basil E. Frankweiler)

___(25) Reread Chapter 3 and narrate.

Spelling

___(20) Complete the first two pages of List 18.

Handwriting

___(5) Complete page

Latin

___(5) Work on Latin pages.

Science

___(5) Sing your habitat song, food chain song , and animal adaptation song

___(5) Look back at your polar bear handout. Name all the ways God has enabled him to adapt to his niche.

___(25) Summative Project Due next Monday. You will take a small toy animal like a Beanie Baby change this animal into a new a habitat following the instructions found on the instruction sheets. There is an art component and a written component.

___(25) Fill out phenology wheel and Science Observation

History

___(5) Sing History Song and Geography Song

___(30) Complete Marco Polo questions in cursive and complete sentences.

Geography

___(10) Mediterranean Sea activity.

$\frac{16}{20} =$	$\frac{6}{4} =$	$\frac{4}{6} =$	$\frac{10}{8} =$	$\frac{3}{12} =$
$\frac{12}{9} =$	$\frac{2}{4} =$	$\frac{12}{10} =$	$\frac{12}{4} =$	$\frac{12}{8} =$
$\frac{8}{3} =$	$\frac{8}{6} =$	$\frac{4}{12} =$	$\frac{10}{4} =$	$\frac{4}{10} =$
$\frac{20}{8} =$	$\frac{4}{8} =$	$\frac{20}{9} =$	$\frac{24}{6} =$	$\frac{9}{6} =$
$\frac{15}{10} =$	$\frac{5}{2} =$	$\frac{12}{20} =$	$\frac{15}{9} =$	$\frac{8}{12} =$
$\frac{4}{20} =$	$\frac{8}{24} =$	$\frac{10}{6} =$	$\frac{3}{6} =$	$\frac{16}{10} =$
$\frac{2}{8} =$	$\frac{20}{6} =$	$\frac{6}{3} =$	$\frac{25}{12} =$	$\frac{9}{12} =$
$\frac{10}{2} =$	$\frac{8}{8} =$	$\frac{50}{100} =$	$\frac{6}{12} =$	$\frac{15}{6} =$
$\frac{10}{3} =$	$\frac{10}{20} =$	$\frac{24}{9} =$	$\frac{6}{8} =$	$\frac{16}{5} =$
$\frac{5}{10} =$	$\frac{14}{8} =$	$\frac{15}{2} =$	$\frac{21}{6} =$	$\frac{16}{24} =$

1. Arrange these fractions in order from least to greatest:

$$\frac{1}{4}, \frac{6}{6}, \frac{4}{8}, \frac{2}{3}$$

2. Write the fraction $\frac{8}{3}$ as a mixed number.

3. Twelve inches equals one foot. Three feet equals one yard. Eight yards equals how many inches?


4. Use digits to write the decimal number thirteen and fifty-two hundredths.

5. Which digit in 456.29 is in the hundredths' place?

6. Name the shaded part of the square

(a) as a fraction.

(b) as a decimal number.



7. Round 8734 to the nearest ten.

8. Compare: $8.42 \bigcirc 8.420$

9. Divide 873 by 4 and write the quotient with a fraction.

10. $\$9.28 + 97¢ + \2

11. $\$1.22 - 74¢$

12.
$$\begin{array}{r} 8.26 \\ 1.4 \\ + 0.72 \\ \hline \end{array}$$

13.
$$\begin{array}{r} 4.892 \\ - 1.9 \\ \hline \end{array}$$

14.
$$\begin{array}{r} \$0.46 \\ \times 3 \\ \hline \end{array}$$

15. $4 \overline{) \$9.16}$

16. $30 \overline{) 625}$


17. $8 - \left(7\frac{4}{5} - \frac{3}{5} \right)$

18. $2\frac{3}{5} + 3\frac{2}{5}$

19. The length of segment PQ is 5 cm. Segment QR is 2 cm long. Find the length of segment PR .



20. The width of the rectangle is 15 mm. What is its perimeter in centimeters?




Name _____

Test _____

Date _____

Score _____

Show all work on this paper. Do not write on the test.



11.

12.

13.

14.

15.

16.

17.

18.

19.

20.

Classroom Practice 47

Name: _____ Date: _____

GRAMMAR:

Exercise 1: Classify each sentence.

- _____ The aliens' leader spoke softly in a strange language.
- _____ Jeremy spilled his soda on Mrs. Granger's desk today!

Exercise 2: Write the correct pattern number in each blank. (P1 = SN V, P2 = SN V-t DO)

- | | |
|--------------------------------------|--|
| _____ 1. My mom wakes up very early. | _____ 4. A fire crackled in the fireplace. |
| _____ 2. We watched the ocean waves. | _____ 5. I bought a collar for my dog today. |
| _____ 3. Sam's dog ate my shoe! | _____ 6. They eat at 12:00 sharp! |

Exercise 3: Write main verbs from Exercise 2 and identify them with a **T** for transitive or an **I** for intransitive.

VERBS	T OR I	VERBS	T OR I	VERBS	T OR I
1.		3.		5.	
2.		4.		6.	

SKILLS:

Exercise 4: List these helping verbs beside the correct tense:
will, was, does, is, were, am, are, had, do, did, have, been, shall, has

PRESENT TENSE	
PAST TENSE	
FUTURE TENSE	

Exercise 5: Identify the tense of the verb by checking the correct box. Then, write the past tense of the main verb. Write **R** for Regular or **I** for Irregular.

VERB	SIMPLE			PAST TENSE FORM OF THE MAIN VERB	R or I
	PRESENT	PAST	FUTURE		
1. fall					
2. sank					
3. create					
4. will swim					
5. update					

Copy each line within the ruled areas carefully and neatly.

The Holiness of God

"Holy, holy, holy, Lord God
Almighty!
Early in the morning our song
shall rise to Thee;
Holy, holy, holy Merciful and
Mighty!
God in Three Persons, blessed
Trinity."

—"Holy, Holy, Holy" Reginald Heber

Name your new animal. Mine is a beareal- part bear, part seal.

She needs three structural adaptations. I chose gills, a tail flipper and hands as fins. She also needs a be-



havior adaptation. My beareal will migrate to chase salmon in the open sea.

Students will receive a French fry boat in class. They will decorate the boat to show the new biome for

their creature. It does not need to be labeled since students will have a write up for their presentation.

Students will then place their creature on the bottom edge of the

French fry boat so it will stand up.

Adaptation Challenge Written Example

My animal is a beareal. He has now been adapted from living in the forests to living in the aquatic biome. Her structural adaptations include a tail fin with flexible muscles that allow him to bend back and fourth in any direction and turn in the water. She also has gills that will allow her to stay underwater and get oxygen from the water. The hand bones are now webbed into flippers that allow her to move water aside so she can swim swiftly.. These adaptations will allow her to out maneuver her prey and catch those fish quickly. Her behavioral adaptation is migration. As many fish move to warmer waters, she too will follow her prey. Since the beareal is so large, she will be at the top of the food chain with only an occasional threat from a large shark.

MARCO POLO

Worksheet

1. Who was the grandfather of Kublai Khan?

2. What kingdom did he inherit, and where did he make his capital?


3. What was unique about the city of Venice?

4. What was the "Silk Road?"

5. What was the occupation of Marco Polo's father? How did this cause young Polo to come into contact with Kublai Khan?

6. What offer did Kublai Khan give to Marco Polo's father?

7. What is *The Travels of Marco Polo* about?



Math

___(5) Reducing Fractions Time Test– Grade the test then make a goal for 5 minutes. Celebrate the improvements!

___(85) Problem Set 91– Please put a heading and mark the number missed. Corrections should be labeled on another sheet. Please put all the pages together neatly in the folder.

English

Grammar

___(5) Chant Reference Chart 152 on page 466. Saying the verbs very quickly like we do in class. Read reference Chart 156 on 480

___(20) Complete Guided Practice on 481. Grade and reteach.

Composition

___(20) Research Skills– Tables and Graphs– Find a table or graph in your science book. On a sheet of notebook paper with a heading and title, tell me the name of the graph and the page. Then tell me all the information you can get from this graph of table. Why is a graph sometimes better than just writing a paragraph?

Literature

___(20) Reread Chapter 4 and complete the quote activity.

Spelling

___(20) second two pages of List 18.

Handwriting

___(5) Use this time to work on your paper.

Science

___(5) Sing the Adaptation Song

___(35) Work on Adaptation Project.

___(20) Complete nature journal.

___(5) Complete Phenology Wheel

History

___(5) Sing History and Geography Songs.

___(5) Explain about the life of Marco Polo to a parent using the pictures in your folder.

___(35) Look for some spices in your house. Make a piece of cinnamon toast and study for your test.

Geography

___(20) Day 2 Mediterranean Sea Project

___(15) Read two nights a week.

$\frac{16}{20} =$	$\frac{6}{4} =$	$\frac{4}{6} =$	$\frac{10}{8} =$	$\frac{3}{12} =$
$\frac{12}{9} =$	$\frac{2}{4} =$	$\frac{12}{10} =$	$\frac{12}{4} =$	$\frac{12}{8} =$
$\frac{8}{3} =$	$\frac{8}{6} =$	$\frac{4}{12} =$	$\frac{10}{4} =$	$\frac{4}{10} =$
$\frac{20}{8} =$	$\frac{4}{8} =$	$\frac{20}{9} =$	$\frac{24}{6} =$	$\frac{9}{6} =$
$\frac{15}{10} =$	$\frac{5}{2} =$	$\frac{12}{20} =$	$\frac{15}{9} =$	$\frac{8}{12} =$
$\frac{4}{20} =$	$\frac{8}{24} =$	$\frac{10}{6} =$	$\frac{3}{6} =$	$\frac{16}{10} =$
$\frac{2}{8} =$	$\frac{20}{6} =$	$\frac{6}{3} =$	$\frac{25}{12} =$	$\frac{9}{12} =$
$\frac{10}{2} =$	$\frac{8}{8} =$	$\frac{50}{100} =$	$\frac{6}{12} =$	$\frac{15}{6} =$
$\frac{10}{3} =$	$\frac{10}{20} =$	$\frac{24}{9} =$	$\frac{6}{8} =$	$\frac{16}{5} =$
$\frac{5}{10} =$	$\frac{14}{8} =$	$\frac{15}{2} =$	$\frac{21}{6} =$	$\frac{16}{24} =$



Guided Practice

Directions: Identify the tense of the verb by checking the correct box. Write the past tense of the main verb to help you decide whether it is regular or irregular. Then, write **R** for Regular or **I** for Irregular.

VERB	SIMPLE			PERFECT			PAST TENSE FORM OF THE MAIN VERB	R or I
	PRESENT	PAST	FUTURE	PRESENT	PAST	FUTURE		
1. has jogged								
2. play								
3. had eaten								
4. will see								
5. looked								
6. will have taken								

Name _____

Copy each line within the ruled areas carefully and neatly.

The Holiness of God

"And one cried to another and said: Holy, holy, holy is the Lord of hosts; The whole earth is full of His glory!" Isaiah 6:3



Study Guide for Test on 3-4 and 3-5

Crusades

What are the dates?

What does Deus Vult mean?

Who urged others to go on crusade?

What were his reasons for the crusades?

Why did men go on crusade? (3 reasons)

As a whole,, do you think the crusades were successful?

St Francis of Assisi

What did God use in Francis's life to bring on his conversion?

What command of Jesus did he take literally?

What is the Catholic order named after him?

How was this order different than others?

St. Francis had a special love of nature.

The Magna Carta

Who is considered the worst king in English history?

Why was he considered so bad?

What is the Magna Carta?

What does the Magna Carta say?

What other documents have been based on it?

St. Thomas Aquinas

Had a love of learning.

He followed the teachings of St. Dominic.

He studied Aristotle.

He felt you could use reason to reveal God to others.

You cannot be a Christian if you don't understand the Gospel.

His most famous work was the Summa Theologica.

Math

___(5) Reducing Fractions Time Test– Grade the test then make a goal for 5 minutes. Celebrate the improvements!

___(85) – Problem Set 92– Please put a heading and mark the number missed. Corrections should be labeled on another sheet. Please put all the pages together neatly in the folder.

English

Grammar

___(5) Chant the Reference Chart on 152 on page 466. Saying the verbs quickly like we do in class.

___(20) Complete Classroom 48. Grade and Correct.

Composition

___(20) Research Skills– Headings– Pretend we are going to research the water cycle. Look in your science book. Use the table of Contents, the Index and headings to find the pages that will let me know where I should look for information that would help the class with research. Make a flow chart on a sheet of notebook paper like we discussed in class to show our findings.

Literature

___(20) Read Chapter 5 and discuss with parents and sign.

Spelling

___(20) Test List 18.

Handwriting

___(5) Use this time to work on your paper.

Science

___(5) Sing the Habitat Song

___(30) Complete your project. Don't forget your written portion.

___(5) Phenology Wheel

___(20) Complete nature journal.

History

___(5) Sing History Song and your Geography Song.

___(20) Continue to study for your history test.

Geography

___(20) Day 3 Mediterranean projects.

___(15) Read two nights a week.

$\frac{16}{20} =$	$\frac{6}{4} =$	$\frac{4}{6} =$	$\frac{10}{8} =$	$\frac{3}{12} =$
$\frac{12}{9} =$	$\frac{2}{4} =$	$\frac{12}{10} =$	$\frac{12}{4} =$	$\frac{12}{8} =$
$\frac{8}{3} =$	$\frac{8}{6} =$	$\frac{4}{12} =$	$\frac{10}{4} =$	$\frac{4}{10} =$
$\frac{20}{8} =$	$\frac{4}{8} =$	$\frac{20}{9} =$	$\frac{24}{6} =$	$\frac{9}{6} =$
$\frac{15}{10} =$	$\frac{5}{2} =$	$\frac{12}{20} =$	$\frac{15}{9} =$	$\frac{8}{12} =$
$\frac{4}{20} =$	$\frac{8}{24} =$	$\frac{10}{6} =$	$\frac{3}{6} =$	$\frac{16}{10} =$
$\frac{2}{8} =$	$\frac{20}{6} =$	$\frac{6}{3} =$	$\frac{25}{12} =$	$\frac{9}{12} =$
$\frac{10}{2} =$	$\frac{8}{8} =$	$\frac{50}{100} =$	$\frac{6}{12} =$	$\frac{15}{6} =$
$\frac{10}{3} =$	$\frac{10}{20} =$	$\frac{24}{9} =$	$\frac{6}{8} =$	$\frac{16}{5} =$
$\frac{5}{10} =$	$\frac{14}{8} =$	$\frac{15}{2} =$	$\frac{21}{6} =$	$\frac{16}{24} =$

Classroom Practice 48

Name: _____ Date: _____

GRAMMAR:

Exercise 1: Classify each sentence.

1. _____ Dad drove his old truck along the rugged trail.

2. _____ Did Tim work on his science project at recess?

Exercise 2: Write the correct pattern number in each blank. (P1 = SN V, P2 = SN V-t DO)

___ 1. Dana watches too much TV. ___ 3. My sister loves yellow flowers.

___ 2. Are you walking home? ___ 4. Sandra laughed at the puppies!

Exercise 3: Write main verbs in Exercise 2 and identify them with a **T** for transitive or an **I** for intransitive.

VERBS	T OR I	VERBS	T OR I
1.		3.	
2.		4.	

SKILLS:

Exercise 4 List these helping verbs beside the correct tense:

will, was, does, is, were, am, are, had, do, did, have, been, shall, has

PRESENT TENSE	
PAST TENSE	
FUTURE TENSE	

Exercise 5: Identify the tense of the verb by checking the correct box. Then, write the past tense of the main verb. Write **R** for Regular or **I** for Irregular.

VERB	SIMPLE			PERFECT			PAST TENSE FORM OF THE MAIN VERB	R or I
	PRESENT	PAST	FUTURE	PRESENT	PAST	FUTURE		
1. will sleep								
2. will have slept								
3. sleep								
4. slept								
5. has slept								
6. had slept								

Copy each line within the ruled areas carefully and neatly.

The Holiness of God

"The four living creatures, each having six wings, were full of eyes around and within. And they do not rest day or night, saying: Holy, holy, holy, Lord God Almighty, Who was and is and is to come!" Revelation 4:8

Answer Key

FOR PARENT USE ONLY

Directions: Identify the tense of the verb by checking the correct box. Write the past tense of the main verb to help you decide whether it is regular or irregular. Then, write **R** for Regular or **I** for Irregular.

VERB	SIMPLE			PERFECT			PAST TENSE FORM OF THE MAIN VERB	R or I
	PRESENT	PAST	FUTURE	PRESENT	PAST	FUTURE		
1. has run				✓			ran	I
2. will have used						✓	used	R
3. had raced					✓		raced	R

Student Note:

The present perfect-tense helping verbs—**has** and **have**—keep a verb phrase in present tense even though the main verb has a past-tense form. (I **have walked** a mile today)

He **has taken** his medicine



Guided Practice

Directions: Identify the tense of the verb by checking the correct box. Write the past tense of the main verb to help you decide whether it is regular or irregular. Then, write **R** for Regular or **I** for Irregular.

VERB	SIMPLE			PERFECT			PAST TENSE FORM OF THE MAIN VERB	R or I
	PRESENT	PAST	FUTURE	PRESENT	PAST	FUTURE		
1. has jogged				✓			jogged	R
2. play	✓						played	R
3. had eaten					✓		ate	I
4. will see			✓				saw	I
5. looked		✓					looked	R
6. will have taken						✓	took	I

19: MARCO POLO

Worksheet

1. Genghis Khan
2. China, Peking
3. It is built on water.
4. A caravan trade route named for the silk that came from the East
5. A merchant, he traveled with his father on a merchant journey through the Holy Land, Persia, Tartary and to China where he met Kublai Khan.
6. An important position in the Chinese Court
7. All about Marco Polo's trip to China, his years there, and his return to Italy over 20 years later